

LESSON 20: REVIEW

Date: _____

1. Complete the following chart.

b		#	
Key	Key Signature	Key	Key Signature
C+	n/a	C+	n/a
F+			
			F# C#
		A+	
	Bb Eb Ab Db		

2. Identify the following major key signatures.



3. Draw the following key signatures.



D+


Ab +

F+

A+

4. Using key signatures, write each scale in quarter notes, one octave ascending and descending.


Bb +




E+



D+




F+




5. Using accidentals, write each scale in half notes, one octave ascending and descending.


A \flat +



E \flat +



A+



G+

